

Name:

Date:

Class:

Block #:

## World War I



### Map Instructions

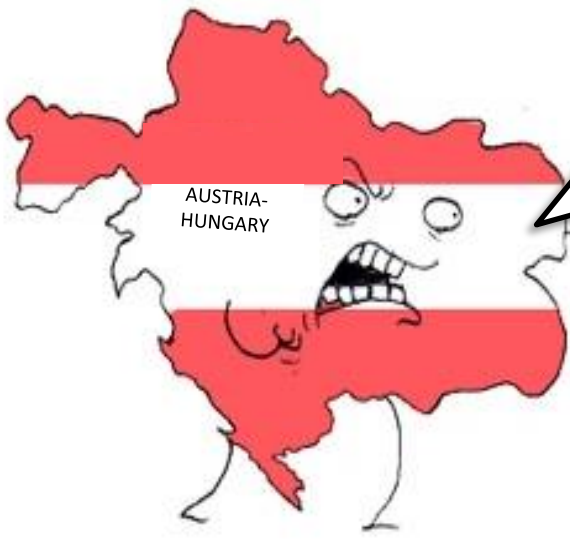
- Label all the nations of Europe visible on the map
  - Albania
  - Great Britain
  - Romania
  - Montenegro
  - France
  - Bulgaria
  - Spain
  - Ottoman Empire
  - Portugal
  - Russia
  - Netherlands
  - Greece
  - Germany
  - Italy
  - Sweden
  - Denmark
  - Austria-Hungry
  - Belgium
  - Serbia
  - Switzerland
- Color the major bodies of water in blue on the map (5 in total)
- Use different colors to show the nations that:
  - Belonged to the Allied Powers
  - Belonged to the Central Powers
  - Remained neutral in the war

**1914**  
1. WHY WAS HE ASSASSINATED?



\*Really shot

2. WHO WAS ASSASSINATED?



3. WHAT WAS AUSTRIA-HUNGARY'S RESPONSE? WRITE IN WORD BUBBLE

4. WHY DOES RUSSIA STEP IN ON BEHALF OF SERBIA?

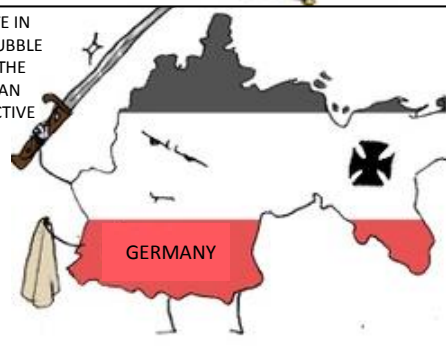
5. WHAT COUNTRIES WERE PART OF THE TRIPLE ENTENTE?



RUSSIA

6. WRITE IN WORD BUBBLE FROM THE GERMAN PERSPECTIVE

5. WHAT COUNTRIES WERE PART OF THE TRIPLE ALLIANCE?




GERMANY

7. FRANCE & GERMANY DECLARE WAR ON EACHOTHER. WHAT PAST HISTORY DO THEY HAVE WITH ECHOTHER ALREADY?

8. GERMANY INVADDED NUETRAL BELGIUM IN ORDER TO INVADE FRANCE. WHAT WAS GREAT BRITAINS RESPONSE?



GERMANY



BELGIUM



GERMANY


9. WRITE IN THE WORD BUBBLE FROM THE G.B. PERSPECTIVE



GREAT BRITAIN

10. List the ALLIES

11. List the CENTRAL POWERS



12. MACHINE GUNS LED TO WHAT NEW TYPE OF WARFARE?



AUSTRALIA

CANADA

ALLIES



# WWI BEGINS COMIC STRIP

DIRECTIONS: AFTER READING/LEARNING ABOUT THE START OF WWI USE YOUR KNOWLEDGE TO COMPLETE THE COMIC STRIP. -Mrs. Sandoval-ERHS