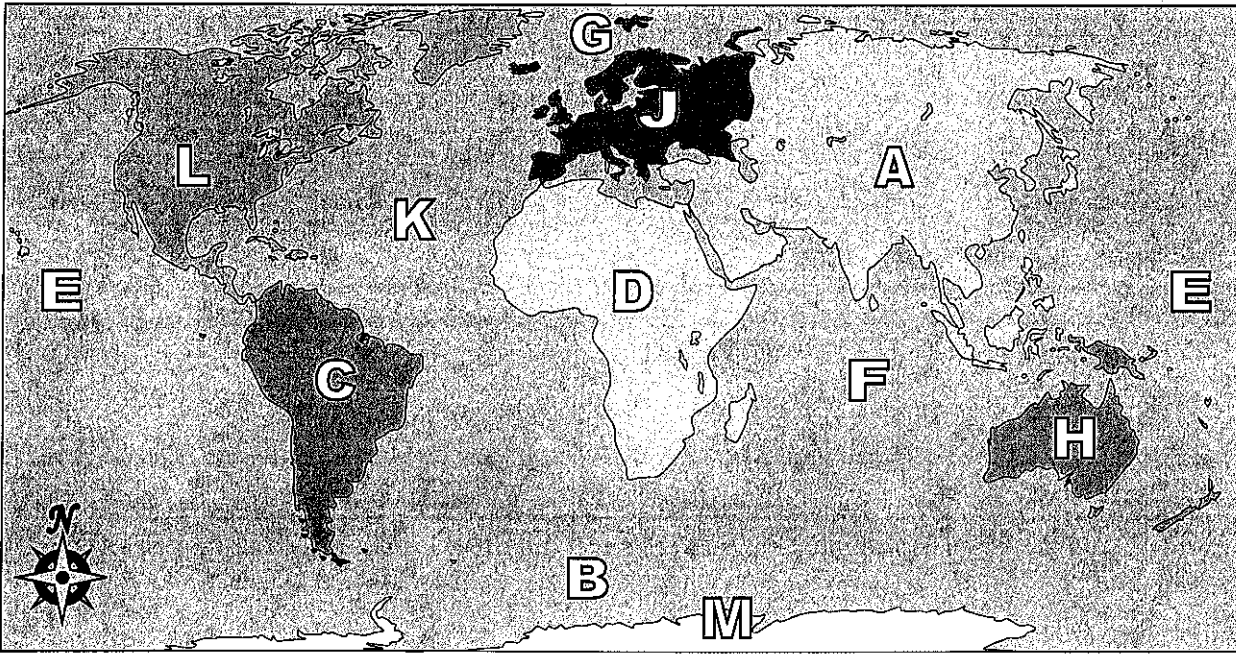




Using the map below, determine which letter represents each continent or ocean.



Answers

1. _____
2. _____
3. _____
4. _____
5. _____
6. _____
7. _____
8. _____
9. _____
10. _____
11. _____
12. _____
13. _____
14. _____
15. _____
16. _____
17. _____

- | | |
|------------------------|--------------------------|
| 1) North America _____ | 8) Pacific Ocean _____ |
| 2) South America _____ | 9) Atlantic Ocean _____ |
| 3) Europe _____ | 10) Indian Ocean _____ |
| 4) Asia _____ | 11) Arctic Ocean _____ |
| 5) Africa _____ | 12) Southern Ocean _____ |
| 6) Australia _____ | |
| 7) Antarctica _____ | |

- 13) Which of these continents is closest to Africa?

A. Antarctica	C. Europe
B. North America	D. Australia
- 14) Which continent is not touching any other continents?

A. Asia	C. Africa
B. Antarctica	D. North America
- 15) Which continent is touching the eastern border of Europe?

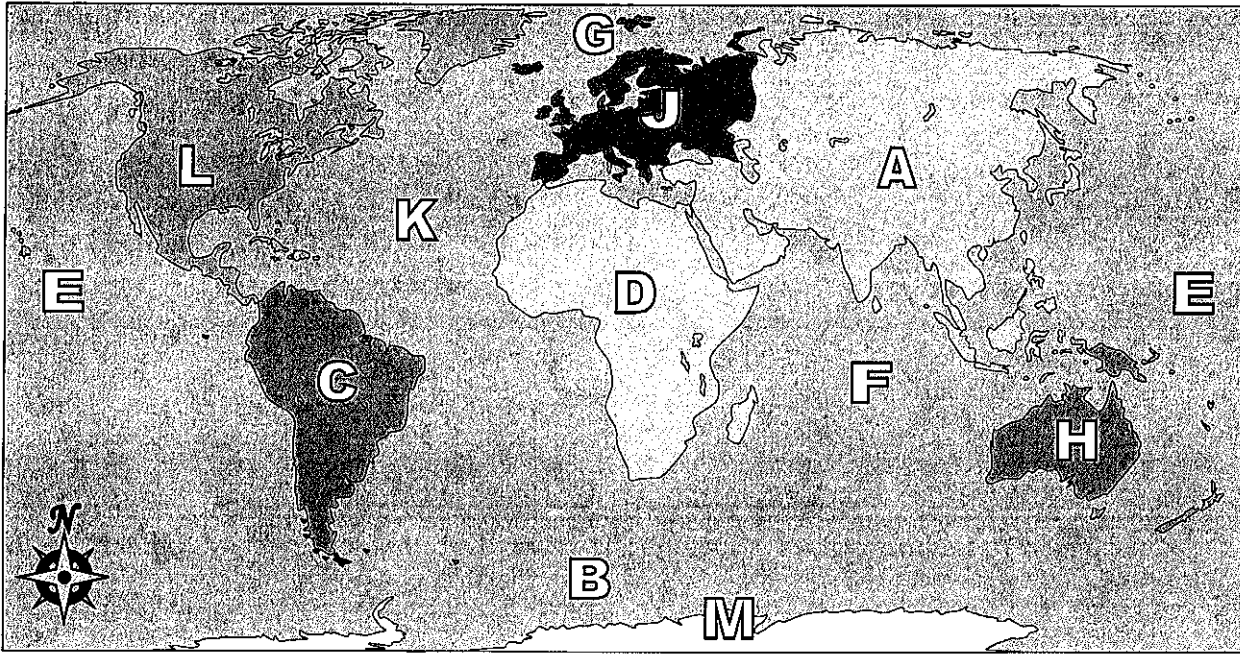
A. North America	C. Africa
B. Australia	D. Asia
- 16) Which ocean touches Africa's western border?

A. Arctic Ocean	C. Indian Ocean
B. Pacific Ocean	D. Atlantic Ocean
- 17) Which ocean touches Africa's eastern border?

A. Atlantic Ocean	C. Pacific Ocean
B. Indian Ocean	D. Arctic Ocean



Using the map below, determine which letter represents each continent or ocean.



- | | | | |
|------------------|------------------|--------------------|------------------|
| 1) North America | <u> L </u> | 8) Pacific Ocean | <u> E </u> |
| 2) South America | <u> C </u> | 9) Atlantic Ocean | <u> K </u> |
| 3) Europe | <u> J </u> | 10) Indian Ocean | <u> F </u> |
| 4) Asia | <u> A </u> | 11) Arctic Ocean | <u> G </u> |
| 5) Africa | <u> D </u> | 12) Southern Ocean | <u> B </u> |
| 6) Australia | <u> H </u> | | |
| 7) Antarctica | <u> M </u> | | |

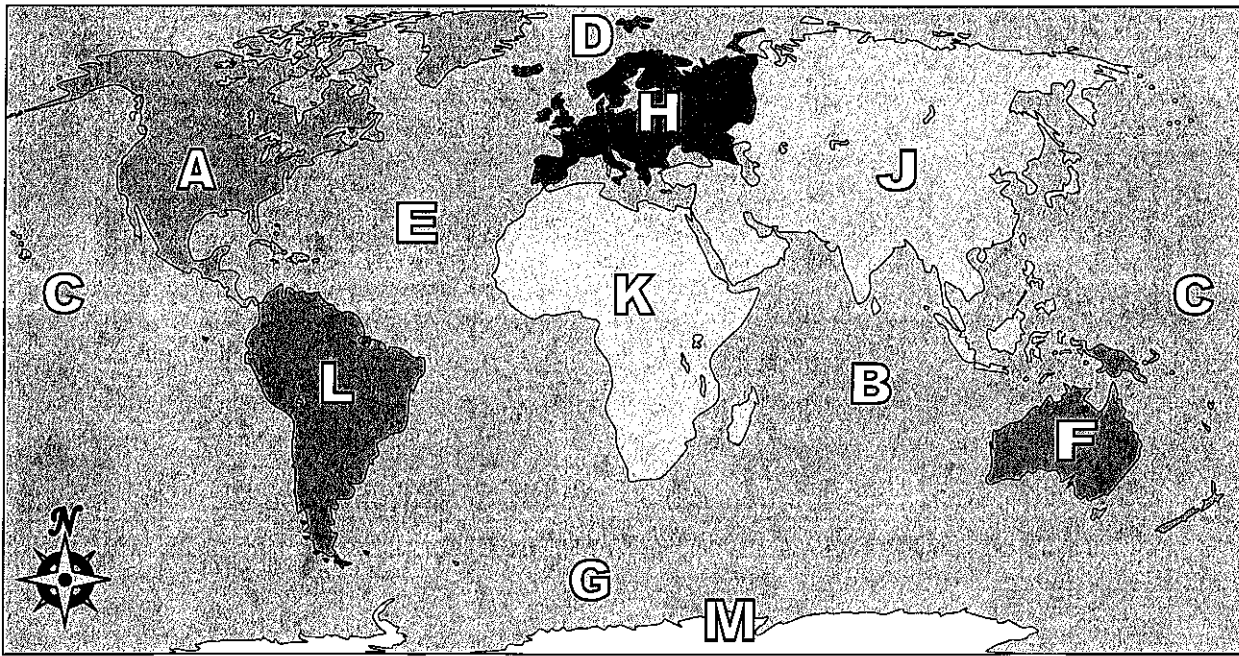
- 13) Which of these continents is closest to Africa?
 A. Antarctica C. Europe
 B. North America D. Australia
- 14) Which continent is not touching any other continents?
 A. Asia C. Africa
 B. Antarctica D. North America
- 15) Which continent is touching the eastern border of Europe?
 A. North America C. Africa
 B. Australia D. Asia
- 16) Which ocean touches Africa's western border?
 A. Arctic Ocean C. Indian Ocean
 B. Pacific Ocean D. Atlantic Ocean
- 17) Which ocean touches Africa's eastern border?
 A. Atlantic Ocean C. Pacific Ocean
 B. Indian Ocean D. Arctic Ocean

Answers

1. L
2. C
3. J
4. A
5. D
6. H
7. M
8. E
9. K
10. F
11. G
12. B
13. C
14. B
15. D
16. D
17. B



Using the map below, determine which letter represents each continent or ocean.



Answers

- 1. _____
- 2. _____
- 3. _____
- 4. _____
- 5. _____
- 6. _____
- 7. _____
- 8. _____
- 9. _____
- 10. _____
- 11. _____
- 12. _____
- 13. _____
- 14. _____
- 15. _____
- 16. _____
- 17. _____

- 1) North America _____
- 2) South America _____
- 3) Europe _____
- 4) Asia _____
- 5) Africa _____
- 6) Australia _____
- 7) Antarctica _____
- 8) Pacific Ocean _____
- 9) Atlantic Ocean _____
- 10) Indian Ocean _____
- 11) Arctic Ocean _____
- 12) Southern Ocean _____

13) If you were in Europe and went south which continent would you end up in?

- A. North America
- B. Africa
- C. Asia
- D. South America

14) Which continent is not touching any other continents?

- A. Antarctica
- B. Africa
- C. North America
- D. Europe

15) Which ocean touches Africa's western border?

- A. Pacific Ocean
- B. Arctic Ocean
- C. Indian Ocean
- D. Atlantic Ocean

16) Which continent is touching the eastern border of Europe?

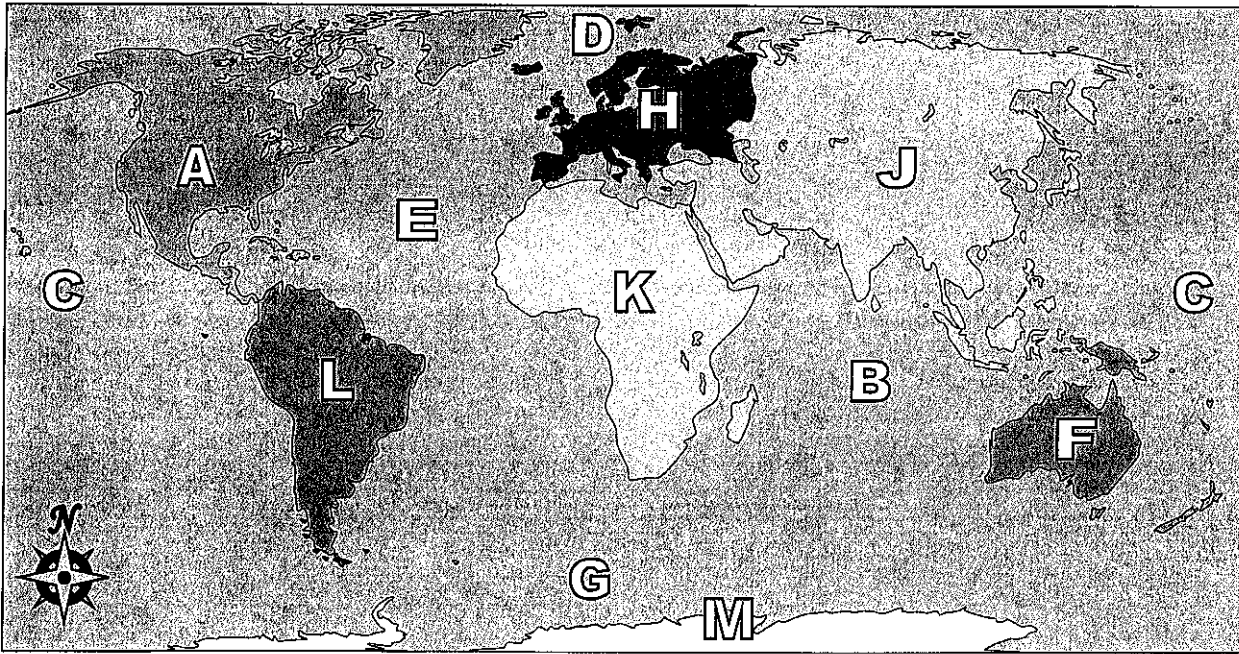
- A. Africa
- B. South America
- C. Asia
- D. Australia

17) Which ocean touches South America's western border?

- A. Indian Ocean
- B. Pacific Ocean
- C. Atlantic Ocean
- D. Arctic Ocean



Using the map below, determine which letter represents each continent or ocean.



Answers

- 1) North America A
- 2) South America L
- 3) Europe H
- 4) Asia J
- 5) Africa K
- 6) Australia F
- 7) Antarctica M
- 8) Pacific Ocean C
- 9) Atlantic Ocean E
- 10) Indian Ocean B
- 11) Arctic Ocean D
- 12) Southern Ocean G

13) If you were in Europe and went south which continent would you end up in?

- A. North America
- B. Africa
- C. Asia
- D. South America

14) Which continent is not touching any other continents?

- A. Antarctica
- B. Africa
- C. North America
- D. Europe

15) Which ocean touches Africa's western border?

- A. Pacific Ocean
- B. Arctic Ocean
- C. Indian Ocean
- D. Atlantic Ocean

16) Which continent is touching the eastern border of Europe?

- A. Africa
- B. South America
- C. Asia
- D. Australia

17) Which ocean touches South America's western border?

- A. Indian Ocean
- B. Pacific Ocean
- C. Atlantic Ocean
- D. Arctic Ocean

- 1. A
- 2. L
- 3. H
- 4. J
- 5. K
- 6. F
- 7. M
- 8. C
- 9. E
- 10. B
- 11. D
- 12. G
- 13. B
- 14. A
- 15. D
- 16. C
- 17. B